


Write these numbers in order of size, starting with the smallest.

901 1091 910 109 190



smallest

Here are some digit cards.

Write all the **three-digit** numbers, **greater than 500**, that can be made using these cards.

One has been done for you.

 626

.....

.....

Circle the number closest to 100

 70 120 85 111 909

Circle the number that is closest to 700

 750 72 651 69 770

Here are three digit cards.

Use each card **once** to make these statements correct.


 <

>

<

Join each number to the set of numbers that it belongs to.

One has been done for you.

| | | |
|---|------|------------------|
|  | 357 | 1 to 100 |
| | 199 | 101 to 200 |
| | 73 | 201 to 300 |
| | 1000 | 301 to 400 |
| | 224 | 401 to 500 |
| | | greater than 500 |

A line connects the number 357 to the box labeled "301 to 400".

3 8 9 1


Choose **three** of these number cards to make an **even** number that is **greater than 400**.



Here are four digit cards.

9 4 1 2

Use each digit card **once** to make the decimal number **nearest to 20**.

 .

Here are five digit cards.

1 3 4 6 9

Use each card **once** to complete the statements below.

 8 > 5

0 < 2

> 7